





Use the array provided to solve each problem.


1)  $33 \times 20 =$




2)  $22 \times 20 =$




3)  $10 \times 13 =$



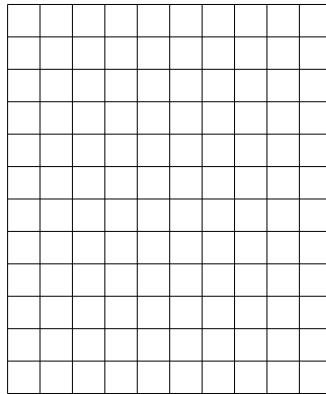
4)  $15 \times 10 =$



5)  $10 \times 15 =$



6)  $12 \times 10 =$



Answers

1. \_\_\_\_\_

2. \_\_\_\_\_

3. \_\_\_\_\_

4. \_\_\_\_\_

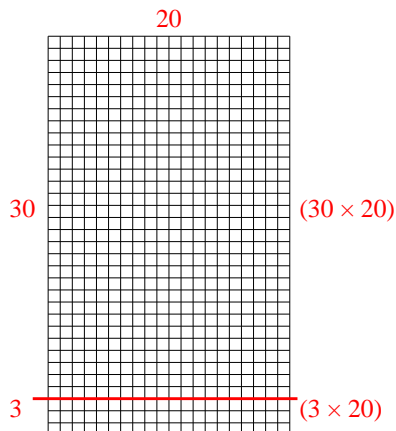
5. \_\_\_\_\_

6. \_\_\_\_\_

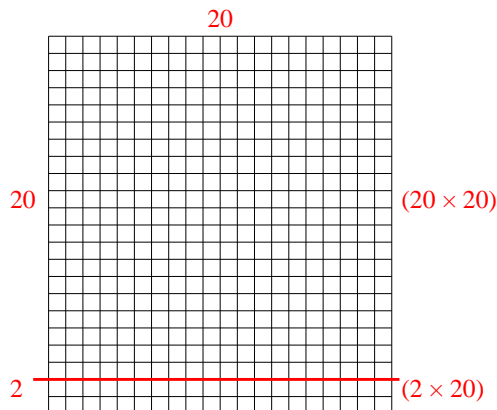


Use the array provided to solve each problem.

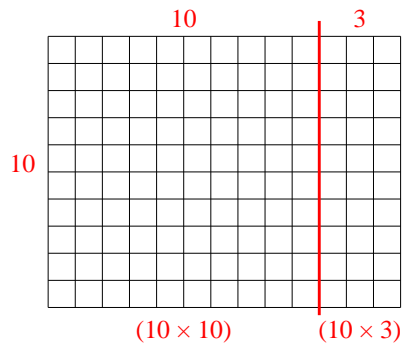
1)  $33 \times 20 =$



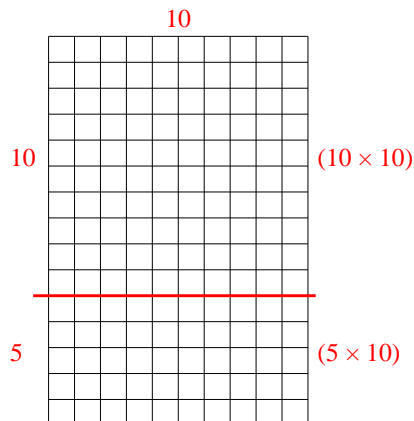
2)  $22 \times 20 =$



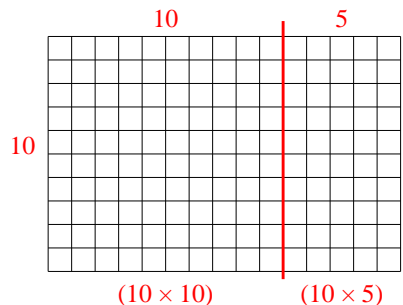
3)  $10 \times 13 =$



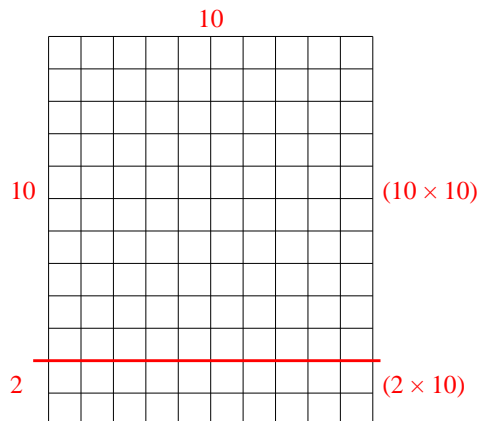
4)  $15 \times 10 =$



5)  $10 \times 15 =$



6)  $12 \times 10 =$



Answers

1. **660**

2. **440**

3. **130**

4. **150**

5. **150**

6. **120**